

**Year 3 Home learning. 1.01.18**

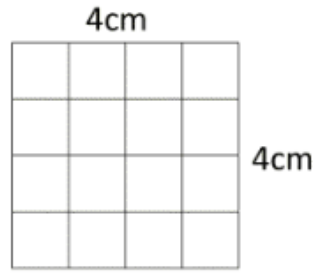
Work out the perimeter of the following rectangles:

1)



Perimeter = \_\_\_\_\_ cm

2)



Perimeter = \_\_\_\_\_ cm

3)



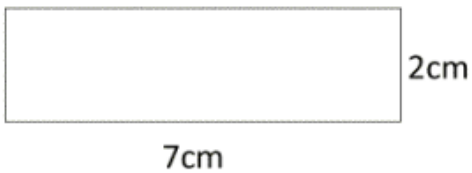
Perimeter = \_\_\_\_\_ cm

4)



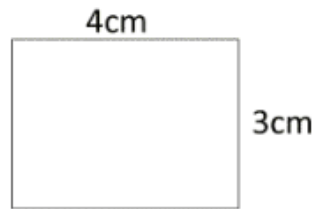
Perimeter = \_\_\_\_\_ cm

5)



Perimeter = \_\_\_\_\_ cm

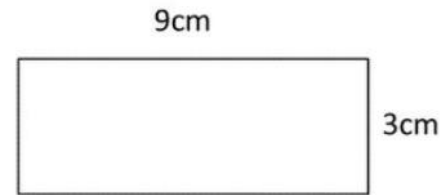
6)



Perimeter = \_\_\_\_\_ cm

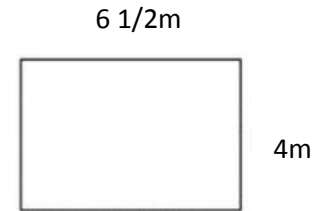
Work out the perimeter of the following rectangles. They are not to scale.

1)



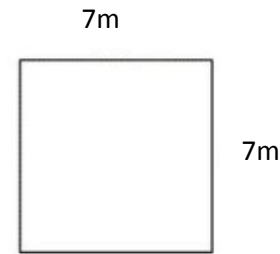
Perimeter = \_\_\_\_\_ cm

2)




Perimeter = \_\_\_\_\_ m

3)



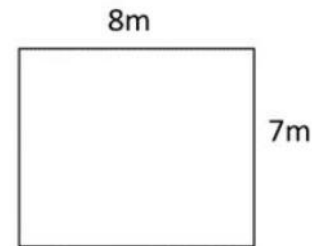
Perimeter = \_\_\_\_\_ m

4)



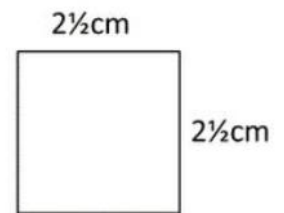
Perimeter = \_\_\_\_\_ m

5)



Perimeter = \_\_\_\_\_ m

6)



Perimeter = \_\_\_\_\_ cm