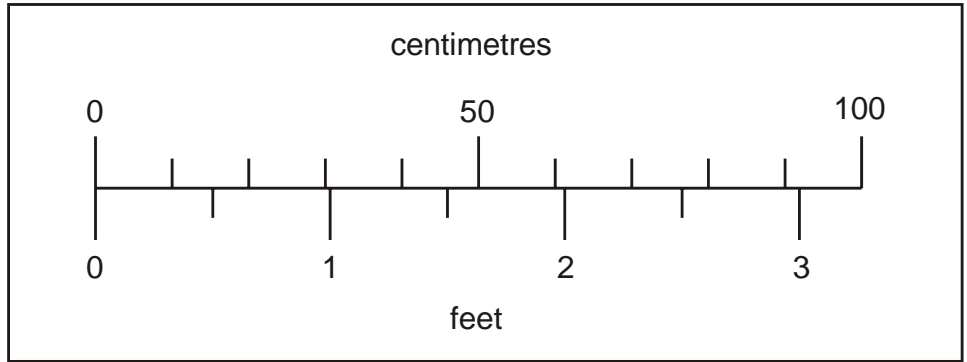


1. This scale shows length measurements in **centimetres** and **feet**.

Look at the scale.



Estimate the number of

centimetres that are equal to  $2\frac{1}{2}$  feet.


 **cm**

Estimate the difference in centimetres between 50cm and  $1\frac{1}{2}$  feet.

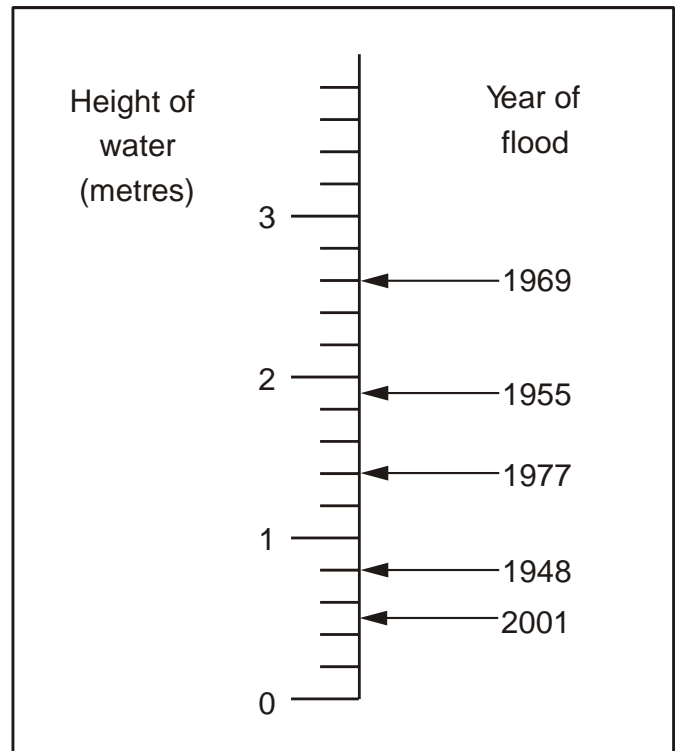

 **cm**

2. This scale shows the dates of floods and the height of the water in the floods.

How high was the water in the 1955 flood?

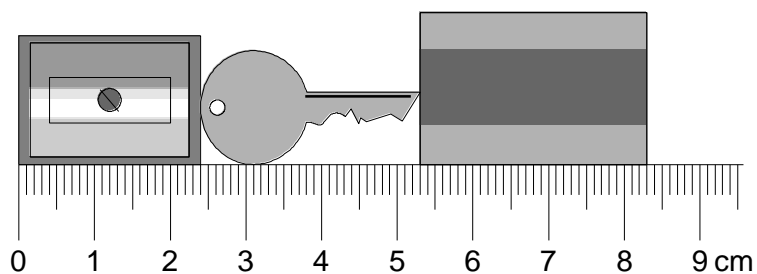

 **m**

How much higher was the water in the 1969 flood than in the 1948 flood?


 **m**



3. Here are a pencil sharpener, a key and a rubber.

**Actual size**




What is the length of **all three things** together?

Give your answer in **millimetres**.

  
 mm

What is the length of the **key**?

Give your answer in **millimetres**.

  
 mm