

# Fantastic Facts Booklet

## F5

Halve even  
numbers to 20

---

$$\frac{1}{2}$$

## Facts for F5

I can halve even numbers to 20.

$$\text{Half of } 20 = 10$$

$$\text{Half of } 18 = 9$$

$$\text{Half of } 16 = 8$$

$$\text{Half of } 14 = 7$$

$$\text{Half of } 12 = 6$$

$$\text{Half of } 10 = 5$$

$$\text{Half of } 8 = 4$$

$$\text{Half of } 6 = 3$$

$$\text{Half of } 4 = 2$$

$$\text{Half of } 2 = 1$$

Have a go at all of these activities to help you learn your number facts.

# Doubling and Halving

# 2



Double 2 is \_\_\_\_\_  
Half of 2 is \_\_\_\_\_

# 4




Double 4 is \_\_\_\_\_  
Half of 4 is \_\_\_\_\_

# 6



Double 6 is \_\_\_\_\_  
Half of 6 is \_\_\_\_\_

# 14



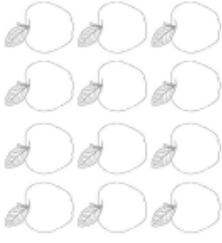
Double 14 is \_\_\_\_\_  
Half of 14 is \_\_\_\_\_

# 20



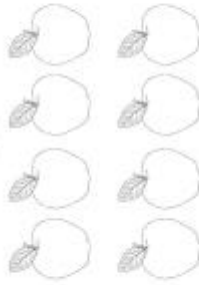
Double 20 is \_\_\_\_\_  
Half of 20 is \_\_\_\_\_

# 12



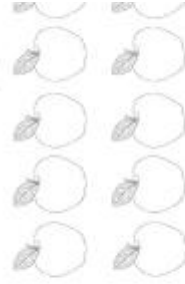
Double 12 is \_\_\_\_\_  
Half of 12 is \_\_\_\_\_

# 8



Double 8 is \_\_\_\_\_  
Half of 8 is \_\_\_\_\_

# 10



Double 10 is \_\_\_\_\_  
Half of 10 is \_\_\_\_\_

# 16



Double 16 is \_\_\_\_\_  
Half of 16 is \_\_\_\_\_

*Draw a diagram to  
show  
how to halve 18.*



Fill in the blanks to show  
the halves to 20



20	
10	

18	
	9

8	
	4

14	
7	

16	
8	

4	

10	

2	
1	

12	
	6

6	

Match the Half  
(using a ruler to help)



5

Half 2

1

Half 16

8

Half 10

3

Half 14

9

Half 8

10

Half 18

7

Half 0

2

Half 20

0

Half 12

4

Half 6



1  
one



2  
two



3  
three



4  
four



5  
five



6  
six



7  
seven



8  
eight




9  
nine



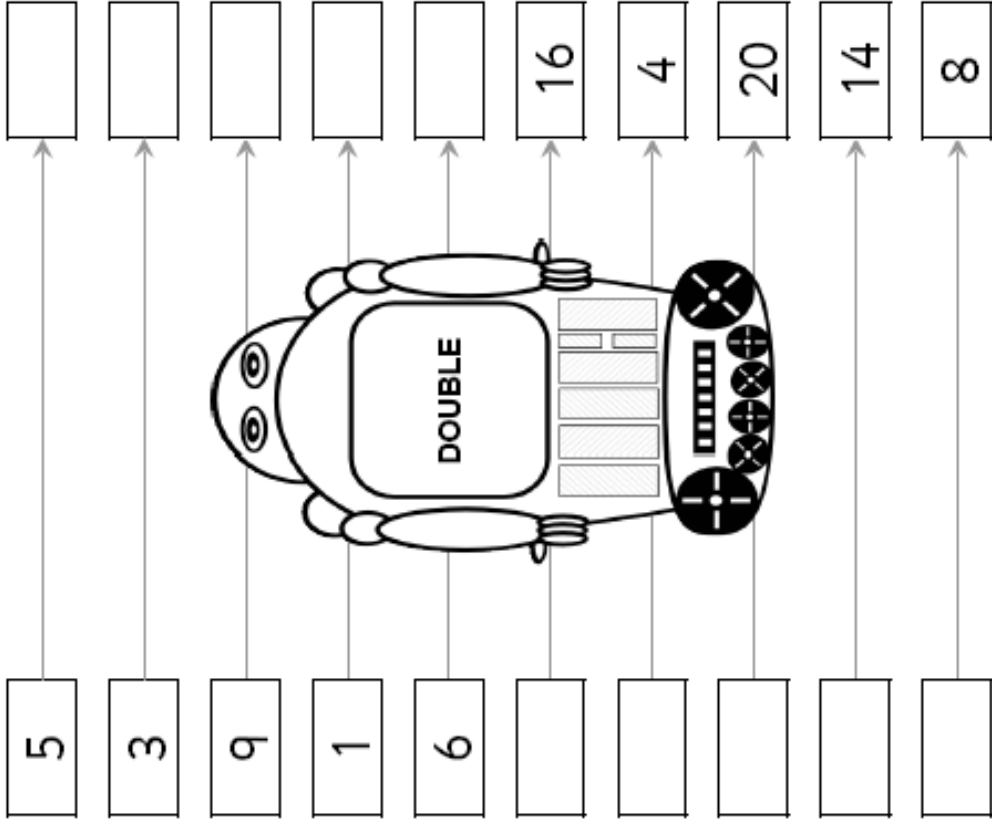
10  
ten

Colour the halves of the even numbers  
the same colour as the double.



Complete the following. Remember – the reverse of doubling is halving.

INPUT



OUTPUT

Half of 18 =

Half of 4 =

Half of 12 =

Half of 16 =

Half of 16 =

Half of 14 =

Half of 2 =

Half of 10 =

Half of 10 =

Half of 20 =

Half of 16 =

Half of 14 =

Half of 6 =

Half of 6 =

Half of 8 =

Half of 18 =

Half of 20 =

Half of 20 =

Half of 14 =

Half of 8 =

Half of 2 =

Half of 12 =

Half of 4 =

Half of 4 =

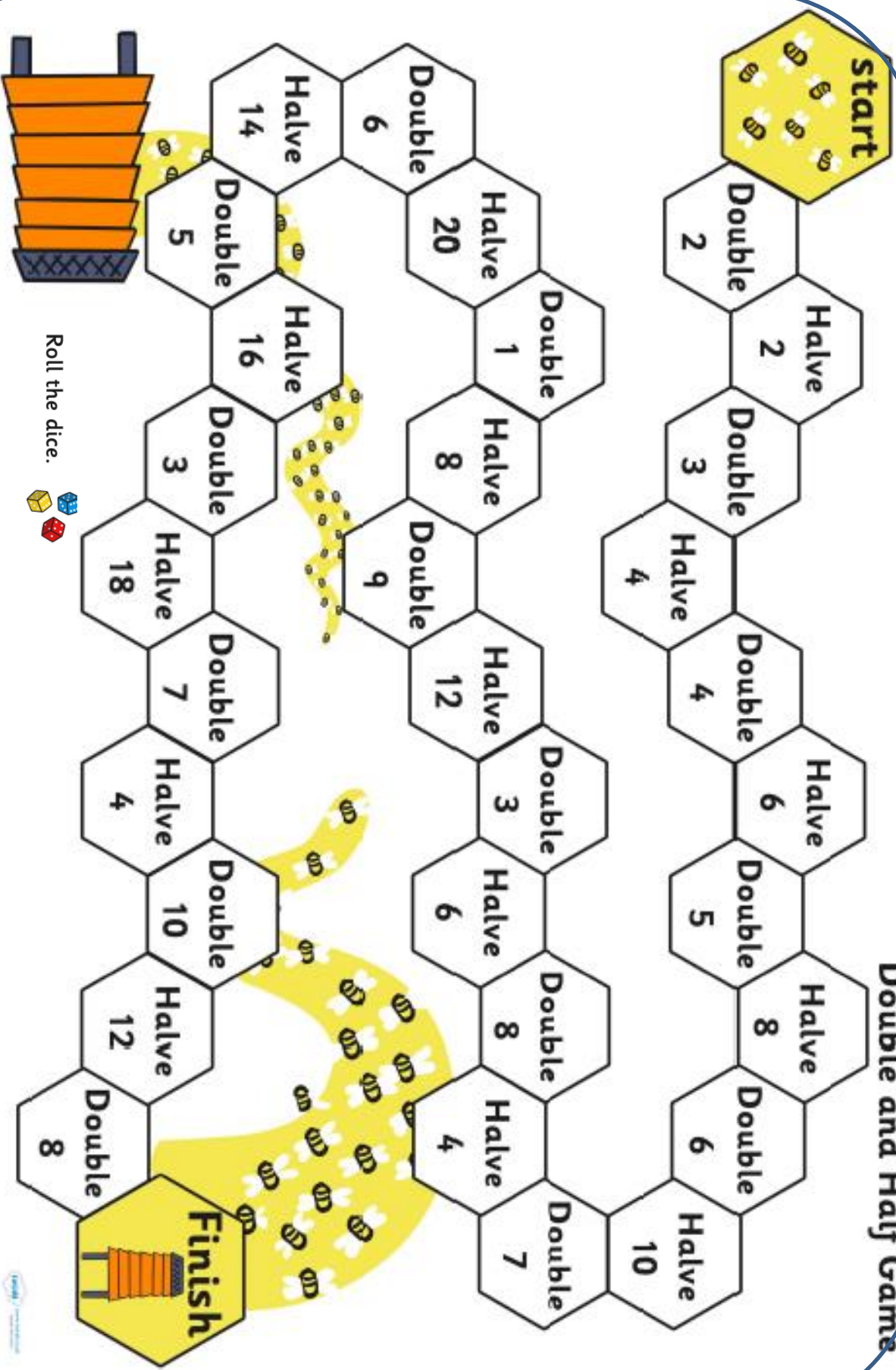
Half of 18 =

Half of 2 =

Half of 10 =

Half of 16 =

# Double and Half Game



Move that number of spaces.

Roll the dice.

Answer the question on that space.

If you answer the question correctly you can stay on the space, if you answer incorrectly you move back to where you came from.

