

Year 6 SATs

Benton Dene Primary School



- Our current curriculum sets high expectations which all schools have had to work hard to meet since the beginning of 2016.
- ‘Old’ National Curriculum levels (e.g. Level 3, 4, 5) have been replaced by a **scaled score**.



What is a 'scaled score'?

A score of 100 will represent the 'national standard' every year to make it easier to compare test scores from year to year.



Mathematics	
Raw score	Scaled score
0	No scaled score (N)
1	
2	
3	80
4	80
5	80
6	80
7	80
8	81
9	82
10	82
11	83
12	84
13	84
14	85
15	86
16	86
17	87
18	87
19	88
20	88
21	88
22	89
23	89
24	90

Mathematics	
Raw score	Scaled score
25	90
26	90
27	91
28	91
29	91
30	92
31	92
32	92
33	93
34	93
35	93
36	94
37	94
38	94
39	94
40	95
41	95
42	95
43	96
44	96
45	96
46	96
47	97
48	97
49	97

Mathematics	
Raw score	Scaled score
50	97
51	97
52	98
53	98
54	98
55	98
56	99
57	99
58	99
59	99
60	100
61	100
62	100
63	100
64	100
65	101
66	101
67	101
68	101
69	101
70	102
71	102
72	102
73	102
74	103



- A child who achieves the 'national standard' (100) will be judged to have demonstrated sufficient knowledge in the areas assessed by the tests.
- A child awarded a scaled score of more than 100 is judged to have exceeded the national standard and demonstrated a higher than expected knowledge of the curriculum for their age.
- A child awarded a scaled score of less than 100 is judged to have not yet met the national standard and performed below expectation for their age.
- A child awarded a score of 112 or more is judged to be performing at a standard which is at Greater Depth.



Key Stage 2 SATs 2018

Year 6 children



Key Stage 2 Tests




Reading test

Spelling test

Grammar & Punctuation test

3 Mathematics tests

Teachers also have to make a judgement on children's writing.



Key Stage 2 Timetable

Day	Test
Monday 14 May	GPaS Paper 1 – short answer questions Paper 2 – spelling
Tuesday 15 May	Reading test
Wednesday 16 May	Maths Paper 1 - Arithmetic test Paper 2 - Reasoning test
Thursday 17 May	Paper 3 – Reasoning test



Reading

Read and answer questions about three texts.

The texts are increasingly difficult.

The questions also range in difficulty.



20

Into your pitiful shell, so brittle and thin

In this line, the word *brittle* is closest in meaning to...

Tick **one**.

shiny.

soft.

delicate.

rough.

1 mark

21

Explain **two** things that the words *emerald scrap* suggest about the frog.

2 marks



Questions 25–36 are about *The Lost World* (pages 8–9).

25 Circle the correct option to complete each sentence below.

(a) The story is told from the perspective of...

Professor
Summerlee.

Lord John.

Malone.

Professor
Challenger.

 1 mark

(b) At the start of the extract the men entered the forest...

carefully.

quickly.

fearfully.

noisily.

 1 mark

(c) There, they came to a patch where the stream was...

smaller.

bigger.

faster.

slower.

 1 mark

(d) The ferns here were spaced...

regularly.

randomly.

carefully.

equally.

 1 mark



Grammar, Punctuation and Spelling

Paper 1 – short answers

14

Tick the option that shows how the underlined words are used in the sentence.

My baby brother was born in the hospital where my father works.

Tick one.

as a preposition phrase

as a relative clause

as a main clause

as a noun phrase

1 mark



Grammar, Punctuation and Spelling

Spellings are given as a blank in a sentence, eg

The prickly jumper was made from a
material.

Some spellings from last year:

likely

straight

sensation

nervous

crumb

probable

thorough

inspiring

bruise

sensibly

violence

monarch



Mathematics

The Maths Test consists of three papers.

Paper 1 - arithmetic

Paper 2 - reasoning

Paper 3 - reasoning




Paper 1

Arithmetic

30mins

8


$$2.5 + 0.05 =$$



1 mark

9

$$5 \times 4 \times 7 =$$



1 mark



Papers 2 & 3

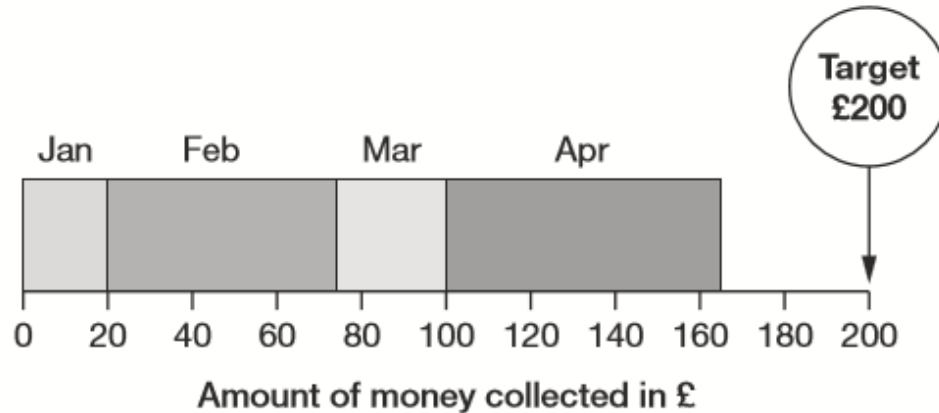
Reasoning

40mins each

4

A school plans to collect £200 between January and May.

This chart shows how much they collected by the end of April.



Write the name of **each** month where they collected more than £50

1 mark

How much money did they collect in February and March **altogether**?

£

1 mark



15

Join dots on the grid to make a quadrilateral that has **3 acute** angles.



Revision

Easter revision packs are given to every pupil (one Maths, one Reading and SPAG). These are reviewed on the return to school in the Summer term and key areas exemplified.

Useful websites at home:

www.mymaths.co.uk (all pupils have a personal log in)

www.satspapers.org.uk

www.bbc.co.uk/bitesize/ks2

www.primaryhomeworkhelp.co.uk

