
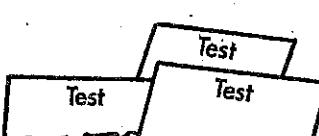





# Test 11

## Answers

1. $\frac{49}{100} = 0.\underline{\quad}$	2. At 1pm how many minutes have passed since midnight?
3. How many seconds in 10 minutes?	4. What is 8 squared ( $8^2$ )?
5. Take 8 from an even number. Is the answer an odd or an even number?	
6. This rectangular number is also a square number.  Is 16 a rectangular and a square number?	7. What are the next two numbers? 12, 24, 36, <u>    </u> , <u>    </u>
9. Write $\frac{8}{100}$ as a decimal.	8. $2.5 \times 10 = \underline{\quad}$ 10. $10^2 = \underline{\quad}$
11. How many obtuse angles in a regular pentagon?	12. One less than half a number is 12, What is the number?
13. Daniel got 75 marks, 72 marks and 63 marks in three tests. What was his average mark? 	14. What are the factors of this rectangular number? 
15. Double 14 and add 28.	

1.
2.
3.
4.
5.
6.
7.
8.
9.
10.
11.
12.
13.
14.
15.

