

1. This table shows when flights take off at an airport.

Flight number	Destination	Take-off time ✈
AX40	Paris	13:35
BH253	Berlin	14:05
CG008	Rome	15:25
DP369	Paris	15:40
EZ44	Lisbon	16:15
FJ994	Dublin	17:25

How many flights take off between 3pm and 5pm?



How much later does the second flight to Paris take off than the first?



The flight to Dublin takes 50 minutes.

What time does it arrive in Dublin?




2. A film starts at 6:45pm.

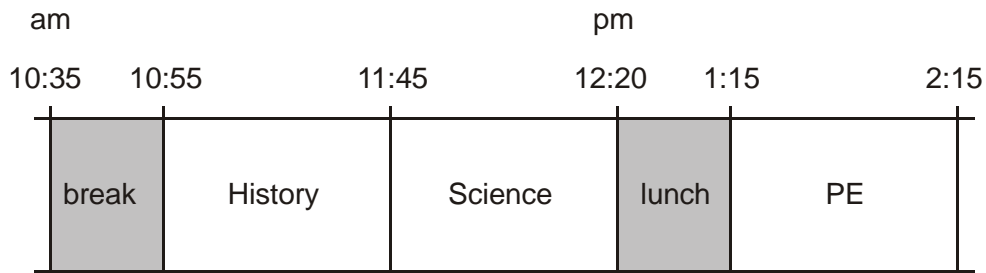
It lasts 2 hours and 35 minutes.

What time will the film finish?

 .....pm




3. Here is part of the timetable for Class 6 on a Monday.



Look at the timetable.

How long is it from the **end** of break to the **start** of lunch?


 .....

1 mark

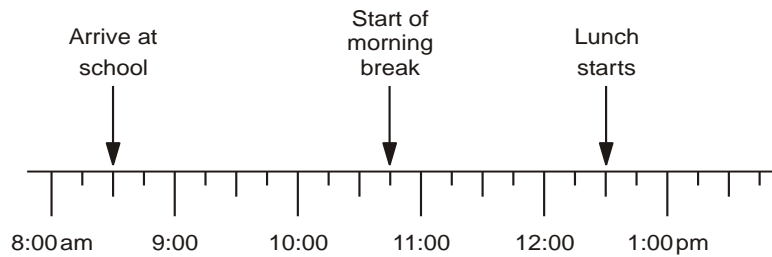
Nisha leaves the Science lesson after 25 minutes.

Then she goes to the dentist.

What time does she leave the Science lesson?



4, Jamie makes a time line of part of his day.



What time does Jamie's morning break start?



am

Lunch lasts for three-quarters of an hour.

What time does lunch **finish**?



pm

5. A clock shows this time.



How long is it from this time until 5pm?



What time was it quarter of an hour before the time on the clock?


 pm

6. These are the radio programmes one morning.

7:00	Music show
7:55	Weather report
8:00	News
8:15	Travel news
8:25	Sport
8:45	Holiday programme



Josh turns the radio on at 7:25 am.

How many minutes does he have to wait for the Weather report?  .....

The Holiday programme lasts for 40 minutes.

At what time does the Holiday programme finish?  .....

7. Here is part of a train timetable.

Edinburgh	–	09:35	–	–	13:35	–	–
Glasgow	09:15	–	11:15	13:15	–	13:45	15:15
Stirling	09:57	–	11:57	13:57	–	14:29	15:57
Perth	10:34	10:51	12:34	14:34	14:50	15:15	16:35
Inverness	–	13:10	–	–	17:05	–	–




How long does the first train from Edinburgh take to travel to Inverness?

 .....

Ellen is at Glasgow station at 1.30pm. She wants to travel to Perth.

She catches the next train.

At what time will she arrive in Perth?

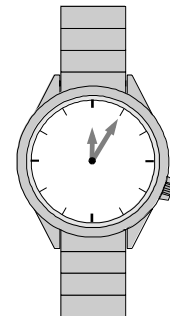
 .....

8. One of these watches is **3 minutes fast**.

The other watch is **4 minutes slow**.


What is the correct time?





9. These are the opening times at a swimming pool.

	opening times		
	am		pm
Monday	Pool closed		
Tuesday			
Wednesday	10:30	to	5:30
Thursday	10:30	to	8:30
Friday	10:30	to	9:00
Saturday	8:00	to	6:00
Sunday	7:00	to	4:00



How many **hours** is the pool open on a **Sunday**?


 .....

10. An aeroplane takes off on Tuesday at

22:47

It lands on Wednesday at

07:05



How long in hours and minutes is the flight?

<b>hours</b>	<b>minutes</b>
--------------	----------------

11. These are the start and finish times on a DVD recorder.

**START**      **14:45**

**FINISH**     **17:25**

For how long was the DVD recording?

**hours**

**minutes**

12. Jamie, Kate and Hassan run a 50m race.

Kate's time is 13 seconds.

Jamie finishes 5 seconds before Kate.


Hassan finishes 3 seconds after Jamie.

What is **Hassan's time** in seconds?



**seconds**

13.



Car Park charges	
Time	Charge
up to 1 hour	20p
1 to 2 hours	50p
2 to 3 hours	£1.00
3 to 4 hours	£1.70
over 4 hours	£5.00

Emma parks her car at **9.30 am**.

She collects the car at **1.20 pm**.

How much does she pay?



.....

Dan and Mark both use the car park.

Dan says,

***'I paid exactly twice as much as Mark but I only stayed 10 minutes longer'.***

Explain how Dan could be correct.



.....  
.....  
.....

14. Here are the sunrise and sunset times for some days in July.

Date	Sunrise	Sunset
7th	04:53	21:18
14th	05:00	21:12
21st	05:09	21:05
28th	05:18	20:55

How many minutes earlier is the **sunset** on 28th July than on 7th July?

 .....minutes

15. Some children ran in two races on sports day.

Here are their times.

	100m race	800m race
Elise	15.9 seconds	3 minutes 02 seconds
Jake	19.7 seconds	2 minutes 58 seconds
Teri	16.8 seconds	3 minutes 01 seconds
Neil	17.1 seconds	2 minutes 59 seconds
Barry	18.4 seconds	2 minutes 57 seconds

Who finished the 100m race in **second** place?

 .....

In the 800m race, how many seconds did Barry finish ahead of Elise?

 .....seconds




16 These are the times letters are collected from a post box.

Monday to Friday	Saturday	Sunday
8am 2pm 6:30pm	11:30am	no collection




What is the **latest** time letters are collected on **Wednesday**?


Carla posts a letter at **9 am on Monday**.

How **long** will it be before it is collected?

  
 **hours**

Gareth posts a letter on **Saturday at 3pm**.

When is it collected from the post box?

 day ..... time .....

17. Tom, Amy and Helen want to go on a boat trip.



There are three boats.

<b>Lark</b> 50 minute trip <b>Tickets</b> <b>£2.75</b> <b>each</b>	<b>Heron</b> 70 minute trip <b>Tickets</b> <b>£3.50</b> <b>each</b>	<b>Kestrel</b> 90 minute trip <b>Tickets</b> <b>£4.20</b> <b>each</b>
--	---	---

Tom and Amy go on the **Heron**.

They leave at **2:15pm**.

At what **time** do they return?

 .....

Helen goes on the **Kestrel** and **gets back at 4:15pm**.

At what **time** did the boat leave?

 .....